

























	A	B	C	D	E	F	G
1							
2							
3							
4							
5							
6							
7							

# IL RETICOLO



# OSSERVA IL RETICOLO E SCRIVI I NOMI DEGLI ELEMENTI

SOSTEGNO 2.0

	A	B	C	D	E	F	G
1							
2							
3							
4							
5							
6							
7							

(A-4) =

(A-5) =

(B-6) =

(B-7) =

(C-3) =

(C-6) =

(D-5) =

(D-1) =

(E-6) =

(E-2) =

(F-7) =

(G-4) =

# OSSERVA IL RETICOLO E COLORA I QUADRATI SEGUENDO LE INDICAZIONI

	A	B	C	D	E	F	G
1			■				■
2						■	
3		■			■		
4				■			
5			■			■	
6		■					
7	■						

(A-7)=

(B-3)=

(B-6)=

(C-1)=

(C-5)=

(D-4)=

(E-3)=

(F-2)=

(F-5)=

(G-1)=

# DISEGNA GLI ELMENETI NEL RETICOLO SEGUENDO LE INDICAZIONI

SOSTEGNO 2.0

	A	B	C	D	E	F	G
1							
2							
3							
4							
5							
6							
7							




(A-3)




(B-2)




(C-7)




(D-5)



(E-1)



(F-4)



(G-6)