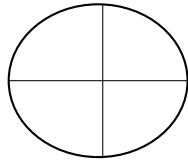
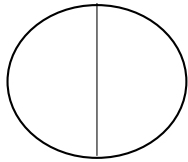


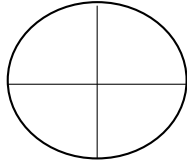
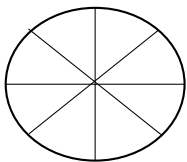
# LE FRAZIONI EQUIVALENTI

COLORA LA PARTE EQUIVALENTE ALLA FRAZIONE INDICATA  
E SCRIVI LA FRAZIONE EQUIVALENTE


---



$$\frac{1}{2} = \underline{\quad}$$



$$\frac{4}{8} = \underline{\quad}$$



$$\frac{1}{3} = \underline{\quad}$$